

KENDRIYA VIDYALAYA NO.3 KORBA , KUSMUNDA

CLASS 1 HOLIDAY HW (AUTUMN BREAK)

Take out the print out of the following sheets and do it in your autumn break

one	many	one	many
Bird		Animal	
Ant		Dove	
Elephant		Weasel	
Shark		Crocodile	
Crow		Axe	
Bat		Frog	
Lake		River	
Sea		Ocean	
Cow		Parrot	
Peacock		Dolphin	
Owl		Quail	
Boy		Girl	
Tooth		Man	
Painter		Artist	
Judge		Pilot	
Woman		Foot	
Head		Hand	

Finger		Toe	
Shawl		Pen	
Pencil		Ruler	
Paper		Eraser	
Tablet		Computer	
Son		Daughter	
Brother		Sister	
Uncle		Aunt	
Grandmother		Grandfather	
Grandson		Granddaughter	
Clip		Comb	
Eye		Ear	
Chair		Table	
Bed		Fan	
Light		Pan	
Van		Train	

**Write rhyming words for the following;**

1. RAT - \_\_\_\_\_  
\_\_\_\_\_


2. CAP - \_\_\_\_\_  
\_\_\_\_\_

3. MAN - \_\_\_\_\_

4. HAD - \_\_\_\_\_  
\_\_\_\_\_

5. FIT - \_\_\_\_\_  
\_\_\_\_\_


**Match with proper preposition**



IN



BETWEEN



ON



UNDER

**Circle the action words:**

1. The man is walking on the road.
2. He is catching the ball.
3. She is laughing.
4. The girl is writing on her notebook.
5. He is reading a story.

**WRITE AND LEARN OPPOSITE OF THE FOLLOWING WORDS**

1. Hot X \_\_\_\_\_

2. Day X \_\_\_\_\_

3. Black X \_\_\_\_\_

4. Big X \_\_\_\_\_

5. Tall X \_\_\_\_\_

6. Come X \_\_\_\_\_

7. Sit X \_\_\_\_\_

8. Good X \_\_\_\_\_

9. Start X \_\_\_\_\_

10. Full X \_\_\_\_\_

**Write the name of things that you notice in this picture.**



\_\_\_\_\_

\_\_\_\_\_  
\_\_\_\_\_  
\_\_\_\_\_

EVS

1. Paste pictures of 10 land, water, air, domestic, wild and pet animals.
2. Make model of plant.

नीचे दिए गए बगीचे के चित्र में आपको क्या-क्या दिखाई देता है?



1- \_\_\_\_\_, 2- \_\_\_\_\_, 3- \_\_\_\_\_, 4- \_\_\_\_\_  
5- \_\_\_\_\_, 6- \_\_\_\_\_, 7- \_\_\_\_\_, 8- \_\_\_\_\_

HINDI

- a) प्रतिदिन पाठ्य पुस्तक पढ़िए ।
- b ) वर्णमाला पढ़कर लिखिए (३ बार) ।
- c) ट से न तक बारहखड़ी लिखिए (२ बार) ।
- d) १ से २० तक हिन्दी में गिनती लिखिए और याद कीजिए।
- e) झूलम-झूली कविता को लिखिए और याद कीजिए।
- f) अपनी मनपसंद सब्ज़ी या फल किसी एक का भी कार्डबोर्ड से कट आउट बनाकर उसमें रंग भरिए।

MATHS

- a) Write numbers name 1 to 30 (2 times)
- b Read and write tables 1 to 5 (2 times)
- c) Draw any object using shapes and colour it.
- d) Write any 5 questions of addition and subtraction and solve it.
- e) Write your one day schedule with time. EX- Wake up time, breakfast time, bathing time, etc.

# **KENDRIYA VIDYALAYA NO.3 KUSMUNDA**

## **AUTUMN BREAK HOLIDAY HOMEWORK (2021-22)**

### **CLASS-II**

#### **➤ ENGLISH**

- a) Write 1 page handwriting daily.**
- b) Draw or paste the different means of transport.**
- c) Make a duster**

#### **➤ EVS**

- a. Draw the different traffic rules .**
- b Draw the solar system.**

#### **➤ MATH**

- 1. Learn and write number names from 1 to 50.**
- 2. Learn and write table from 2 to 10.**
- 3. Do 5 questions daily of 2-digit (addition).**
- 4. Draw /cut and paste different design and pattern.**

#### **हिंदी**

- 1. वर्णमाला लिखिए। (5 बार)**

2. दो अक्षर वाले दस शब्द लिखिए ।

3. तीन अक्षर वाले दस शब्द लिखिए ।

4. कविता याद करनी है।

( तीन दोस्त, दुनिया रंग बिरंगी )

\*\*\*\*\*

**केंद्रीय विद्यालय कुसमुंडा**  
**दुर्गा पूजा अवकाश गृहकार्य**  
**कक्षा –तीसरी विषय –हिंदी**

१. दशहरा के बारे में सात वाक्य लिखिए एवं चित्र चिपकाइए ।
२. सर्दी आई कविता को सुलेख के रूप में लिखो । एवं चित्र चिपकाइए या बनाइए ।
३. दस अनाजों के नाम लिखिए एवं चित्र चिपकाइए ।
- ४ . रसोई घर में उपयोग में आने वाले कोई पांच (५) बर्तनों के नाम लिखिए एवं चित्र बनाइए या चिपकाइए ।
५. इन कामों के लिए कहाँ जाते है ?  
क. आटा खरीदने - .....  
ख. पंचर बनवाने - .....  
ग. दूध खरीदने - .. -.....  
घ. जूते की मरम्मत करवाने- .....  
ड. सुराही खरीदने - .....  
च . काँपी- किताब खरीदने- .....  
छ. बाल कटवाने- .....  
ज. गेहूँ पिसवाने -.....

**English Holiday Homework**

A) Write 5 page cursive handwriting.

B) Read the following sentences and use the appropriate pronouns.

1. Murat is a good boy. \_\_\_\_\_ always listens to \_\_\_\_\_ teacher.
2. Amit and Sumit are twin brothers. \_\_\_\_\_ take the same bag to school
3. Milly and I are very good friends. \_\_\_\_\_ have known each other since childhood.
4. The mangoes are very sour. Where did you buy \_\_\_\_\_?
5. I love watching Tom and Jerry. \_\_\_\_\_ reminds me of my childhood days.
6. I bought this book for my sister. \_\_\_\_\_ often read it together.
7. This is Steve. Do you know \_\_\_\_\_?
8. There are many windows here. But all of \_\_\_\_\_ are jammed.
9. The army has reached \_\_\_\_\_ destination.
10. My aunt and uncle live in Delhi. \_\_\_\_\_ often visit \_\_\_\_\_.

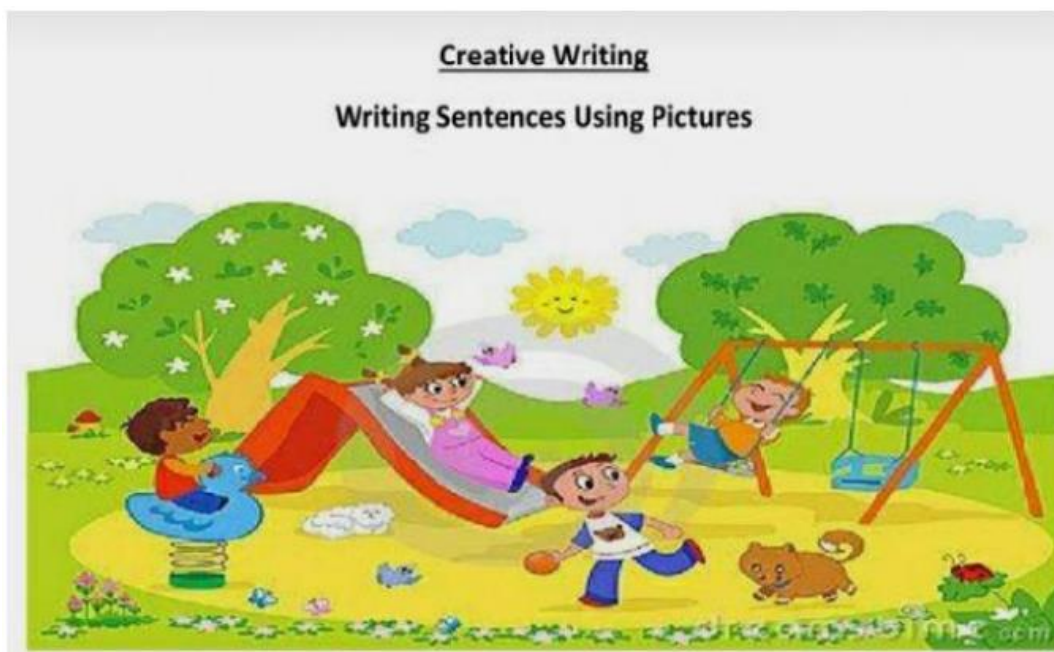


C) Read the following sentences and select the correct form of the verb given in brackets.

1. Rita \_\_\_\_\_ a mile every day. (run/runs)
2. The dogs \_\_\_\_\_ all night. (barks/bark)
3. The cat \_\_\_\_\_ the snake. (catch/caught)
4. We \_\_\_\_\_ in the park in the evenings. (play/plays)
5. Mia \_\_\_\_\_ school yesterday. (went/go)
6. Sheela \_\_\_\_\_ to be a Police Officer when she grows up.  
(want/wants)
7. Mahesh \_\_\_\_\_ back to his mother. (ran/run)
8. Amy \_\_\_\_\_ very fast. (walk/walks)
9. You can \_\_\_\_\_ with us. (come/came)
10. They \_\_\_\_\_ to a picnic together. (went/go)

D) Fill in the blanks with the appropriate collective nouns:

1. A \_\_\_\_\_ of cows
2. A \_\_\_\_\_ of robbers
3. A \_\_\_\_\_ of musicians
4. A \_\_\_\_\_ of kittens
5. A \_\_\_\_\_ of puppies



E) Look at the picture and write five sentences about a day in the park.

---

---

---

---

---

---

---

## LOOK, READ AND WRITE.



boat – yellow – cake – beach – seagulls  
car – playing – dogs – making – pink

The family are at the \_\_\_\_\_. Kim and Sue are eating a \_\_\_\_\_. Ben is relaxing on the \_\_\_\_\_. Nick is driving a \_\_\_\_\_. Lucy and Hugo are \_\_\_\_\_ with a ball and their cousin Sam is \_\_\_\_\_ a sandcastle. Two \_\_\_\_\_ are on a rock and there are two \_\_\_\_\_ on the boat. There is a \_\_\_\_\_ hat in the water next to the \_\_\_\_\_ fish.

## Maths Holiday Homework

1. WRITE AND LEARN TABLES FROM 2 TO 20.
2. DRAW DIFFERENT SHAPES WITH THEIR NAMES.
3. DRAW PICTURES OF CLOCK AND MENTION TIME  
(a) 15 MINUTES PAST 10 O'CLOCK (b) 30 MINUTES PAST 2 O'CLOCK
4. FILL IN THE BLANKS –  
1 Kg = \_\_\_\_\_ gram ,  $\frac{1}{2}$  Kg = \_\_\_\_\_ gram ,  $\frac{1}{4}$  Kg = \_\_\_\_\_ gram
5. CONVERT Kg in gram and gram in kg-  
(a) 5.5 kg = \_\_\_\_\_ gram, (b) \_\_\_\_\_ kg = 9500 gram (c) \_\_\_\_\_ kg = 7320 gram
6. FIND WHICH IS THE HEAVIEST IN THE GROUP IN KG- –  
TRUCK      BICYCLE      CAR  
1 Kg COTTON    2 Kg CLOTHES     $\frac{1}{2}$  Kg IRON  
BOOK      PENCIL      ERASER  
WRITE DIFFERENT WAYS TO MAKE 1Kg  
1 Kg = 200 g + 200 g + 100 g + 500 g  
1 Kg = \_\_\_\_\_  
1 Kg = \_\_\_\_\_

## EVS

1. Paste or draw any 5 outdoor and indoor game and write its name also.
2. Write the name of 5 Indian and international player of any sports or game.
3. Write 10 sentence about your favourite player and paste picture.
4. Make mask of any fruits and vegetables.
5. Make post box or collect stamps from post office and paste it in your copy.
6. Write daily 1 page handwriting in four

## COMPUTER HOLIDAY HOMEWORK

Q.1 Write about the following topics:

1. Input and Output devices
2. Different types of software

Q.2 Make a colourful chart or collage on A4 size paper to display the name and use of input and output devices.

## **CLASS IV**

### **Autumn break holiday H.W**

#### **EVS**

1. In the map of India locate the state and union Territories.
2. Learn all the map of state and union Territories.
3. Read the lesson a rivers tales and Write down the reasons of river getting Polluted.
4. Make models of agriculture using card board and silver paper.
5. Learn all the question answers written in your notebook (Term II).

#### **ENGLISH**

1. Write ten pairs of singular plural verbs.
2. Write 3 words of each letter of English Alphabet (A-Z)
3. Write a paragraph on Diwali or dusshera.

### **केन्द्रीय विद्यालय क्रमांक 3 कुसमुंडा शरदकालीन अवकाश कार्य 2023-24 कक्षा – 4 विषय- हिन्दी**

प्रश्न 1. 10 स्वतंत्रता सेनानियों के नाम लिखिए एवं चित्र चस्पा कीजिए।

प्रश्न 2. महात्मा गांधी के बारे में 8 वाक्य लिखिए ।

प्रश्न. 3. दशहरा के बारे में 8 वाक्य लिखिए ।

प्रश्न. 4. नीचे लिखे गये शब्द किन किन के लिए प्रयोग किये जाते हैं :-

1. महामना- \_\_\_\_\_
2. गुरुदेव- \_\_\_\_\_
3. नेताजी- \_\_\_\_\_
4. लोकनायक- \_\_\_\_\_

5. पंजाब केसरी- \_\_\_\_\_
6. शहीदे आज़म- \_\_\_\_\_
7. पंडित जी- \_\_\_\_\_
8. मेवाड़ केसरी- \_\_\_\_\_
9. छत्रपति- \_\_\_\_\_
10. चाचा- \_\_\_\_\_
11. शास्त्री जी- \_\_\_\_\_

प्रश्न 5. सुलेख लिखिए (3 पृष्ठों में)- स्वतंत्रता की ओर

### **MATHS**

Q.1 Write multiplication table from 2 to 20 and learn it.

Q.2 Write counting number from 1 to 100 in word in Hindi eg- (1-एक).

Q.3 Draw 3 shapes and Divide  $\frac{1}{4}$ ,  $\frac{1}{2}$ , and  $\frac{3}{4}$  part and colour it.

Q.4 How much does  $\frac{1}{2}$  kg of tomatoes cost?

Q.5 What is the cost of  $\frac{1}{4}$  kg of potatoes?

Q.6 What is the cost of  $\frac{3}{4}$  kg of carrot.

### **COMPUTER**

Write short notes on : -

1. RAM and ROM
2. Hard Disk
3. Compact Disc
4. Digital Versatile Disc
5. Flash Drive
6. Blu-ray Disc
7. Multimedia Card

# **KENDRIYA VIDYALAYA NO.3 KUSMUNDA**

## **AUTUMN BREAK HOLIDAY HOMEWORK (2023–24)**

### **CLASS-5A**

#### **➤ ENGLISH**

- 1. Draw the tense chart in your note book**
- 2. Write one paragraph on your favorite festival.**
- 3. Write a notice informing students that you have found a geometry box.**

#### **➤ EVS**

- 1. Make a list of some state highways and national highways which are familiar to you?**
- 2. Collect the information about street signals.**
- 3. Write the five slogans written on the petrol pump (in Hindi or English).**  
Make the poster.
- 4. What are energy sources? Write the report on Solar Energy.**
- 5. Collect the news reports published on 'Fuel' or 'Petroleum'. Cut these reports and make the collage from it.**
- 6. Write the different kinds of houses and where they used.**

#### **➤ MATH**

- 1. Learn table from 2 to 10.**
- 2. Find the L.C.M by division method –**  
**a) 12,30,40   b) 16,24,36,54**
- 3. Draw 3 shapes for 2D and 3D Diagram ?**
- 4. Find the answers -a)  $(3 \times 3) - (2 \times 2) = \underline{\hspace{1cm}}$**   
**b)  $(5 \times 6) - (2 \times 4) = \underline{\hspace{1cm}}$**
- 5. Find the value -a)  $2.5 - 2.25 =$**   
**( b)  $0.5 + 0.05 =$**

**(c)  $0.05+0.025 =$**

**6.write the following as decimals.one has been done for you.**

**Eg- (a) one tenths = 0.1**

**(b)forty five hundredths =**

**c) five point three two=**

**7. Solve the problem –**

**$67856 \div 28$  ,**

**$78561 \div 14$ ,**

**a)  $4 \times 467 \times 5 =$**

**b)  $5 \times 248 \times 125 =$**

**हिंदी**

**शरद अवकाशीय गृहकार्य**

**प्रश्न .1प्रतिदिन पाठ्य पुस्तक का पठन कीजिए।**

**प्रश्न .2सुलेख लिखिए -पाठगुरु और चेला-**

**प्रश्न .3सुलेख लिखिए और कविता याद कीजिए -**

**पाठ बाघ आया उस रात-**

**प्रश्न .4दशहरा और अंधेर नगरी पर वाक्य लिखिए और चित्र बनाइए। 8-7**

**प्रश्न .5कोई एक नैतिक कहानी लिखिए।**

**COMPUTER HOLODAY HOMEWORK**

**Q. Write about the following topics in your note book:-**

**A) Generations of computers.**

**B) Characteristics and Limitations of computers.**

**C) Five features of windows 10 that have made it popular.**